

Best Buys and Proportion

Name _____ Date _____


Part A - Best Buys – Direct Proportion

Teresa is setting up a new nursery and needs to buy the following items.
She is on a budget so needs to buy the cheaper option.

For each of the following items, work out which option is the best value.

Bowls


Bamazon – £5.07



IKEA 204.613.78 Kalas Pack of 6 Plastic Bowl Dishes Multi Coloured Pastel
★★★★☆ ~ 273

Set of 6

Wamazon - £10.99



Youngever 9 Pack 300ml Small Plastic Bowls, Re-usable Kids Plastic Bowls, Toddler Bowls Set of 9 in 9 Assorted Colors...
★★★★☆ ~ 2,685

Set of 9

Bowls - workings and final answer

Baby wipes

Asba - £6.85



12 packs

Pesco – £1.80



3 Packs

Baby wipes - workings and final answer

Best Buys and Proportion

Name _____ Date _____

Bibs

<p>Bamazon – 3 pack</p>  <p>Silicone Bibs for Babies Weaning Waterproof Feeding Bibs with Wide Food Crumb Catch...</p> <p>★★★★☆ 57</p> <p>£7.69 ✓prime</p>	<p>Wamazon – 4 pack</p>  <p>ABirdon 4 Pack Silicone Bibs for Babies, Waterproof Soft Baby Bibs with Roll Up Foo...</p> <p>★★★★☆ 1,407</p> <p>£9.99 ✓prime</p>	<p>Fabazon – 5 pack</p>  <p>XM-Amigo 5 Pack of Silicon...</p> <p>£11.99</p>
--	---	---

Bibs - workings and final answer

Breakfast cereal

<p>Asba - £1.40 for 500g</p>  <p>500g</p> <p>Multigrain Hoops</p>	<p>Pesco - £1.10 for 375g</p>  <p>Multigrain Hoops Cereal 375G</p>
---	--

Breakfast cereal - workings and final answer

Nappies

<p>Asba £5.00</p>  <p>Pampers New Baby Size 3 42 Nappies Essential Pack</p>	<p>Pesco 2 boxes for £16</p>  <p>Pampers New Baby Size 3 72 Nappies Jumbo+ Pack</p>
---	---






Nappies - workings and final answer

Best Buys and Proportion

Name _____ Date _____

Part B – Costs

Teresa has chosen the following products but needs to know the cost for her nursery.

<p>5 packs of paper cost £17.75. How much would 12 packs cost?</p> 	<p>12 pencils cost 65p. How much would 90 pencils cost?</p> 
<p>3 cots cost £147. How much would 8 cost?</p> 	<p>If four sets of cutlery costs £7.72, how much would 30 sets cost?</p> 
<p>15kg of play sand costs £4.50. How much would 40kg cost?</p> 	<p>If 2 sets of this toy cost £65.54, how much would 3 sets cost?</p> 