

















Name _____ Date _____

Shopping 1 - Name the pictures

cauliflower	pears	kiwis	chicken
sausages	mushrooms	tomatoes	kebabs
strawberries	beef	mince meat	onions
garlic sausage	pork chops	lamb	bananas

How much is... How much are... Write is or are

- How much _____ a chicken?
- How much _____ the tomatoes?
- How much _____ the pears?
- How much _____ the garlic sausage?
- How much _____ the mince meat?
- How much _____ the beef?
- How much _____ the strawberries?
- How much _____ the pork chops?
- How much _____ the kebabs?
- How much _____ the cauliflower?
- How much _____ the kiwi?
- How much _____ the lamb?









Name _____

Date _____

Shopping 2a: How much is..... How much are.....









At the greengrocer's... Fill in the missing prices.

Work in pairs

			
49p for six		59p a kilo	
			
	99p a punnet		£1.99 a kilo

At the butcher's... Fill in the missing prices.

Work in pairs

			
£1.50 a kilo		Chicken £2.99	
			
	99p each		Lamb £4.25 a kilo









Name _____

Date _____

Shopping 2b: How much is... ? How much are... ?









At the greengrocer's... Fill in the missing prices.

Work in pairs

			
	25p each		99p a lb
			
28p each		80p each	

At the butcher's... Fill in the missing prices.

Work in pairs

			
	1.25p each		Beef £5 a kilo
			
£1.25 a lb		10 slices 99p	

Name _____ Date _____

Shopping 3 - Write a shopping list



At the greengrocer's...

6 tomatoes	_____
2 kiwis	_____
1 kilo onions	_____
4 pears	_____
2 punnets of strawberries	_____
1 cauliflower	_____
½ kilo of mushrooms	_____
Total cost:	_____

ON YOUR SHOPPING LIST

What is the most expensive item? _____

What is the cheapest item? _____

How much did you spend in total? _____

At the butcher's ...

1 kilo of sausages	_____
2 pork chops	_____
1 chicken	_____
2lb mince meat	_____
2 kebabs	_____
10 slices of garlic sausage	_____
1 kilo beef	_____
Total cost:	_____



ON YOUR SHOPPING LIST

What is the most expensive item? _____

What is the cheapest item? _____

How much did you spend in total? _____