

Handling cash in a salon

Show all your working out clearly

Name _____ Date _____

The Salon

Today you are on the reception desk at the salon to get work experience.

These are the jobs you need to do:

1. Set up the float. It should be fifty pounds. Check that it is right. Write the amount in money of each in the row below:

£10 notes	£5 notes	£2 coins	£1 coins	50p coins	20p coins	10p coins	5p coins	2p coins	1p coins
1	2	1	12	12	25	36	20	10	20

2. Use the price list to answer the questions on page 2:

Dry Cut	£5
Cut and blow-dry	£8
Deep conditioning	£7
Beard trim	£1.50
Acid perm	£15
Full head bleach	£22
Manicure	£7
False nails	£14
Long highlights	£27
Underneath colour	£12
Lip wax	£3
Eyelash tint	£3.50
Massage	£9
Hairspray	£4.70
Hair wax	£2.69
Conditioner	£3.75
Cuticle conditioner	£4.99

Handling cash in a salon

Show all your working out clearly



Name _____ Date _____

- a. Mrs. Green has an acid perm and buys some conditioner. She pays with a £20 note.
How much change do you give her?

- b. Mrs. Patel has an eyelash tint and manicure. She pays with a £10 note and a £2 coin.
How much change do you give her?

- c. Write down three different ways you could give Mrs. Patel her change. (I.e. what coins could you give her?)

- d. John comes in for his weekly beard trim. This week he has a dry cut as well. He pays with a £20 note. How much change do you give him?

- e. Miss Chen has a massage and buys some conditioner. She tells you to round the amount up to the next £5 to take as a tip. How much tip has she given?

- f. Mrs. Williams has a set of false nails and an eyelash tint. She tells you to take £2 tip and pays with two £10 notes. How much change do you give her?

- g. Mrs. Osman buys some hairspray, hair wax and conditioner. She pays with a £10 note and a £5 note. How much change do you give her?

- h. Mr. Achebe has a cut and blow dry. He has a voucher for a half price beard trim. How much does he pay altogether?

- i. Mr. Achebe pays with a £5 note and 2 x £2 coin. How much change do you give him?


- j. Angela has a full head bleach and a deep conditioner. She has a voucher for £10 off. How much does she pay?

Handling cash in a salon

Show all your working out clearly


Name _____ Date _____

3. Mrs. Austin always pays by cheque, but she is quite forgetful. Can you help her fill it in correctly? It should be for £25.99.

	Date: _____
BANK OF NORTHAMPTON	
PAY _____	<div style="border: 1px solid black; padding: 5px; display: inline-block;">£</div>
THE SUM OF _____	


SIGNED: _____	

4. Is this cheque for £22.13, written on August 12 2011, okay?

	Date: <u>08/12/11</u>
BANK OF NORTHAMPTON	
PAY <u>Carrie's Salon</u>	<div style="border: 1px solid black; padding: 5px; display: inline-block;">£22.13</div>
THE SUM OF <u>Twenty two pounds and thirty pence</u>	

SIGNED: <u>Ronald Brown</u>	

5. Change the cheque so that it is right.

	Date: _____
BANK OF NORTHAMPTON	
PAY <u>Carrie's Salon</u>	<div style="border: 1px solid black; padding: 5px; display: inline-block;">£22.13</div>
THE SUM OF _____	

SIGNED: <u>Ronald Brown</u>	

Handling cash in a salon

Show all your working out clearly

Name _____ Date _____

6. It is the end of the day and this is the cash in the till. You need to make a £50 float and add up the takings.

