

# Handling cash in a restaurant (Answers)

Show all your working out clearly

Name \_\_\_\_\_ Date \_\_\_\_\_

# The Restaurant

Today you are working on cash register at The Restaurant to get work experience.

These are the jobs you need to do:

- a. Set up the float. It should be fifty pounds. Check that it is right. Write the amount in money of each in the row below:

£10 notes	£5 notes	£2 coins	£1 coins	50p coins	20p coins	10p coins	5p coins	2p coins	1p coins
1	2	1	12	12	25	36	20	10	20

Denomination	Number	Value
£10	1	10.00
£5	2	10.00
£2	1	2.00
£1	12	12.00
50p	12	6.00
20p	25	5.00
10p	36	3.60
5p	20	1.00
2p	10	.20
1p	20	.20
<b>Total</b>		<b>50.00</b>

# Handling cash in a restaurant (Answers)

## Show all your working out clearly



Name \_\_\_\_\_ Date \_\_\_\_\_

b. Use the price list to answer the following questions:

Jacket Potato and 1 filling	£5.00
Salmon Salad	£8.00
Lasagne and Garlic Bread	£7.00
Bread Roll	£1.50
T Bone Steak	£15.00
Lobster	£22.00
Soup of the day	£3.50
Roast Beef	£14.00
Paella (for 2 persons)	£27.00
Mixed Grill	£12.00
Chilli Nachos	£5.00
Plain Salad	£3.50
Salmon Salad	£7.00
Cheese Salad	£4.70
Ice Cream	£2.69
Apple Pie	£3.75
Chocolate cake and cream	£4.99

- a. Mrs. Green has a jacket potato and a plain salad. She pays with a £20 note. How much change do you give her?

**Jacket potato 5.00 + Plain salad 3.50 = £8.50**

**£20.00 - £8.50 = £11.50p**

**You give her £11.50 change**

- b. Mrs. Patel has Lasagne and garlic bread and a plain salad. She pays with a £10 note and a £2 coin. How much change do you give her?

**Lasagne £7.00 + Plain Salad £3.50 = £10.50**

**£12.00p - £10.50p = £1.50**

**You give her £1.50 change**

- c. Write down three different ways you could give Mrs. Patel her change. (I.e. what coins could you give her?)

**Any 3 different ways**

John comes in for his usual soup. This week he has apple pie as well. He pays with a £20 note. How much change do you give him?

**Soup £3.50 + Apple Pie £ 3.75 = £7.25**

**He pays with £20.00.**

**£20.00 - £7.25 = £12.75**

**I need to give him £12.75 change**

# Handling cash in a restaurant (Answers)

## Show all your working out clearly



Name \_\_\_\_\_ Date \_\_\_\_\_

- d. Miss Chen has soup. She tells you to round the amount up to the next £5 to take as a tip.  
How much tip has she given?

**She has soup = £3.50 and gives £5.00**

**£5.00 - £3.50 = £1.50**

**She has given me £1.50 tip**

- e. Mrs. Williams has soup and a mixed grill. She tells you to take £2 tip and pays with two £10 notes. How much change do you give her?

**Soup £3.50 + Mixed Grill £12.00 + £2.00 tip = £17.50**

**She pays with £20.00 - £17.50 = £2.50**

**I give her £2.50 change**

- f. Mrs. Osman orders 2 jacket potatoes and a soup. She pays with a £10 note and a £5 note. How much change do you give her?

**Jacket Potato £5.00 + Jacket Potato £5.00 + Soup £3.50 = £13.50**

**She pays with £10.00 + £5.00 = £15.00**

**£15.00 - £13.50 = £1.50**

**I give her £1.50 Change**

- g. Mr. Achebe has Paella for him and his daughter. He has a voucher for a half price meal.  
How much does he pay altogether?

**£27.00 ÷ 2 (Half price voucher) = £13.50**

**He will pay £13.50**

- h. Mr. Achebe pays with a £10 note and 2 x £2 coin. How much change do you give him?

**£10.00 + 2 x £2 = £14.00**

**£14.00 - £13.50 = 50p**

**He will get 50p change**

- i. Angela has a jacket potato, lasagne and chocolate cake. She has a voucher for £10 off.  
How much does she pay.

**Jacket potato £5.00 + Lasagne £7.00 + Chocolate Cake £4.99 = £16.99**

**She has a voucher for £10.00**

**£16.99 - £10.00 = £6.99**


**She will have to pay £6.99**

# Handling cash in a restaurant (Answers)

## Show all your working out clearly

Name \_\_\_\_\_ Date \_\_\_\_\_

1. Mrs. Austin always pays by cheque, but she is quite forgetful. Can you help her fill it



Date: **11/01/2012**


BANK OF NORTHAMPTON

PAY Carrie's Restaurant

THE SUM OF _____ Twenty five pounds 99p only _____	<b>£25.99</b>
--	---------------

SIGNED: \_\_\_\_\_ *J Austin* \_\_\_\_\_

2. Is this cheque for £22.13, written on August 12<sup>th</sup> OK?



Date: 08/12/11

BANK OF NORTHAMPTON

PAY Carrie's Restaurant


THE SUM OF <u>Twenty two pounds and thirty pence</u>	£22.13
--	--------

SIGNED: \_\_\_\_\_ *Ronald Brown* \_\_\_\_\_

Date wrong

Pence wrong

3. Change the cheque so it is correct



Date: \_\_\_\_\_ **12/08/2011** \_\_\_\_\_

BANK OF NORTHAMPTON

PAY Carrie's Restaurant

THE SUM OF _____ <b>Twenty two pounds thirteen pence only</b> _____	£22.13
---	--------

SIGNED: \_\_\_\_\_ *Ronald Brown* \_\_\_\_\_

# Handling cash in a restaurant (Answers)

Show all your working out clearly



Name \_\_\_\_\_ Date \_\_\_\_\_

a. Use this grid to add up the takings on the next page.

Denomination	Number	Value
<b>£20</b>	<b>4</b>	<b>80.00</b>
<b>£10</b>	<b>5</b>	<b>50.00</b>
<b>£5</b>	<b>5</b>	<b>25.00</b>
<b>£2</b>	<b>4</b>	<b>8.00</b>
<b>£1</b>	<b>18</b>	<b>18.00</b>
<b>50p</b>	<b>-</b>	
<b>20p</b>	<b>8</b>	<b>1.60</b>
<b>10p</b>	<b>2</b>	<b>.20</b>
<b>5p</b>	<b>-</b>	
<b>2p</b>	<b>8</b>	<b>.16</b>
<b>1p</b>	<b>17</b>	<b>.17</b>
<b>Total</b>		<b>183.13</b>

**£183.12 - £50.00 float = takings £133.12**



# Handling cash in a restaurant (Answers)

## Show all your working out clearly

Name \_\_\_\_\_ Date \_\_\_\_\_

- b. It is the end of the day and this is the cash in the till. Add up all the money and take away the original float of £50.00 to see what has been taken .

