

Handling cash in a restaurant

Show all your working out clearly

Name _____ Date _____

The Restaurant

Today you are working on cash register at The Restaurant to get work experience.

These are the jobs you need to do:

1. Set up the float. It should be fifty pounds. Check that it is right. Write the amount in money of each in the row below:

£10 notes	£5 notes	£2 coins	£1 coins	50p coins	20p coins	10p coins	5p coins	2p coins	1p coins
1	2	1	12	12	25	36	20	10	20

Denomination	Number	Value
£10		
£5		
£2		
£1		
50p		
20p		
10p		
5p		
2p		
1p		
Total		

Handling cash in a restaurant

Show all your working out clearly



Name _____ Date _____

2. Use the price list to answer the following questions:

Jacket Potato and 1 filling	£5.00
Salmon Salad	£8.00
Lasagne and Garlic Bread	£7.00
Bread Roll	£1.50
T Bone Steak	£15.00
Lobster	£22.00
Soup of the day	£3.50
Roast Beef	£14.00
Paella (for 2 persons)	£27.00
Mixed Grill	£12.00
Chilli Nachos	£5.00
Plain Salad	£3.50
Salmon Salad	£7.00
Cheese Salad	£4.70
Ice Cream	£2.69
Apple Pie	£3.75
Chocolate cake and cream	£4.99

- Mrs. Green has a jacket potato and a plain salad. She pays with a £20 note. How much change do you give her?
- Mrs. Patel has Lasagne and garlic bread and a plain salad. She pays with a £10 note and a £2 coin. How much change do you give her?
- Write down three different ways you could give Mrs. Patel her change. (I.e. what coins could you give her?)
- John comes in for his usual soup. This week he has apple pie as well. He pays with a £20 note. How much change do you give him?

Handling cash in a restaurant

Show all your working out clearly



Name _____ Date _____

- e. Miss Chen has soup. She tells you to round the amount up to the next £5 to take as a tip. How much tip has she given?

- f. Mrs. Williams has soup and a mixed grill. She tells you to take £2 tip and pays with two £10 notes. How much change do you give her?

- g. Mrs. Osman orders 2 jacket potatoes and a soup. She pays with a £10 note and a £5 note. How much change do you give her?

- h. Mr. Achebe has Paella for him and his daughter. He has a voucher for a half price meal. How much does he pay altogether?

- i. Mr. Achebe pays with a £10 note and 2 x £2 coin. How much change do you give him?


- j. Angela has a jacket potato, lasagne and chocolate cake. She has a voucher for £10 off. How much does she pay?

Handling cash in a restaurant

Show all your working out clearly


Name _____ Date _____

3. Mrs. Austin always pays by cheque, but she is quite forgetful. Can you help her fill it in correctly? It should be for £25.99.

	Date: _____
BANK OF NORTHAMPTON	
PAY _____	<div style="border: 1px solid black; padding: 5px; display: inline-block;">£</div>
THE SUM OF _____	


SIGNED: _____	

4. Is this cheque for £22.13, written on August 12 2011, okay?

	Date: <u>08/12/11</u>
BANK OF NORTHAMPTON	
PAY <u>Carrie's Restaurant</u>	<div style="border: 1px solid black; padding: 5px; display: inline-block;">£22.13</div>
THE SUM OF <u>Twenty two pounds and thirty pence</u>	

SIGNED: <u>Ronald Brown</u>	

5. Change the cheque so that it is right.

	Date: _____
BANK OF NORTHAMPTON	
PAY <u>Carrie's Restaurant</u>	<div style="border: 1px solid black; padding: 5px; display: inline-block;">£22.13</div>
THE SUM OF _____	

SIGNED: <u>Ronald Brown</u>	

Handling cash in a restaurant

Show all your working out clearly



Name _____ Date _____

6. Use this grid to add up the takings on the next page.

Denomination	Number	Value
£10		
£5		
£2		
£1		
50p		
20p		
10p		
5p		
2p		
1p		
Total		

Handling cash in a restaurant

Show all your working out clearly

Name _____ Date _____

7. It is the end of the day and this is the cash in the till. You need to make a £50 float and add up the takings.

