

# A DAY IN SKEGNESS



## Activity 1

1. You have a day trip to Skegness planned for the 27<sup>th</sup> of June.

June 2007						
Mon	Tue	Wed	Thu	Fri	Sat	Sun
				1	2	3
4	5	6	7	8	9	10
11	12	13	14	15	16	17 Fathers Day
18	19	20 First day of summer	21	22	23	24
25	26	27	28	29	30	

A. What day is the 27<sup>th</sup> of June?

B. The mini bus has to be booked two days in advance so what date would you have to book it?





2. For lunch you stop at a café. The following is on the menu:

Egg and chips	£ 3.50
Bacon sandwich	£ 1.50
Fish and chips	£ 4.50
Mug of coffee or tea	£ 0.50
Scone and tea	£ 1.75

A. How much would you and a friend pay for two bacon sandwiches, a mug of coffee and a mug of tea?

B. Your friend offers to pay half. How much does she have to give you?

3. You have looked at the weather for the next four days.

Thu	Fri	Sat	Sun
			
Rain/Thunder High 19 Low 11	Light Rain High 15 Low 9	Rain High 13 Low 8	Scattered Showers High 15 Low 8

A. What type of weather will there be on Friday?

B. Which days have the lowest temperature?

C. Which day has the highest temperature?

4. While you are in Skegness you go into the sweet shop to buy some rock.

You buy	
Rock	£ 2.50
Sugar dummies	£ 1.50
Candy lollies	£ 1.50
Packet of sweets	£ 2.00

**A. You only have £10 on you. Is that enough?**

5. You decide to buy something to eat from the motorway café on the way home from Skegness.

You make a list.

You want 2 egg sandwiches, 2 bananas, 3 samosas, 2 teas and 1 apple.

**A. Complete the list.**

2	Egg sandwiches
—	Samosas
—	Bananas
—	Apple
—	Teas

When you get back to your seat, you check how much you have spent.

Egg sandwiches	£ 3.90
Samosas	£ 2.25
Bananas	£ 1.20
Apple	£ 0.45
Teas	£ 1.60
<b>Total</b>	<b>£ 8.35</b>

**B. Check your calculation on a calculator.**





Were you right?



6. You ask 20 people what they did while they were in Skegness.



A. Complete the results.

	Number of people		Number of people
			
			

B. Circle the most popular thing people did that day.



## Activity 2

7. While you are in Skegness you find out it's your friend's birthday on June 29<sup>th</sup>. You decide to go for a meal.

June						
Mon	Tue	Wed	Thu	Fri	Sat	Sun
				1	2	3
4	5	6	7	8	9	10
11	12	13	14	15	16	17
18	19	20	21	22	23	24
25	26	27	28	29	30	

- A. On what day is your friend's birthday?

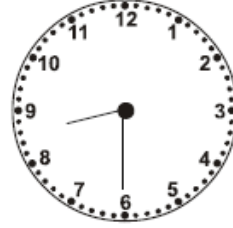
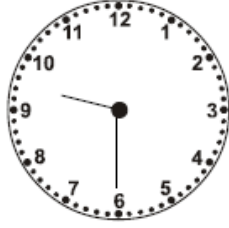

There is a special offer at the restaurant. It costs £25.00 per person for a 3 course meal. You will also share a bottle of wine which costs £7.99. You pay for your friend as a treat for her birthday

- B. How much does the meal cost you?

Space for working out

8. Your meal is booked for 9.30 pm.

**A. Tick the clock that shows 9.30 pm.**



You take a taxi to the restaurant. It costs you £6.00.

**B. How much change will you get from £20.00?**

Space for working out

Your friend offers to pay half.

**C. Write half in figures.**

**You have now finished all the activities.  
Check your work carefully**

# A DAY IN SKEGNESS – Answers

## Activity 1

**1A** Wednesday

**1B** Mon 25 June 2007 25/06/07 June 25<sup>th</sup> 07 (or any acceptable date).  
Do not accept American style dates.

**2A** £4.00

**2B** £2.00

**3A** Light rain

**3B** Saturday and Sunday

**3C** Thursday

**4A** Yes £10 is enough. (Total cost is £7.50)

**5A** List completed as follows: 3 samosas, 2 bananas, 1 apple, 2 teas.

**5B** No. The correct answer is £9.40

**6A** beach 7 shopping 5 bus tour 5 meal 3

**6B** beach circled

## Activity 2

**7A** Friday

**7B** £57.99

**8A** middle clock ticked

**8B** £14.00

**8C**  $\frac{1}{2}$  (also accept 0.5 or 50%)

To obtain an editable version of the original Word document  
please send teaching ideas or any adult basic skills resource that  
you would like to share to [maggie@skillsworkshop.org](mailto:maggie@skillsworkshop.org)

**THANK YOU**