

Entry 2 Numeracy Practice – C

Going to the match

Curriculum References

Covers most areas of the E2 curriculum (number, measure and data).

Gaye Noel, the contributor, explains ...

I have put together 'practice assignments' for Entry 1 - 3 in order to prepare learners for the City & Guilds numeracy assignments.

Although they do not contain as many different areas of the curriculum as the actual live assignments, I have found them very useful. Hope someone else might as well!

Regards
Gaye Noel


Park Lane College
Leeds

More of Gaye's practice assignments are available:

Entry 1 – A, B.

Entry 2 – Lunch, Zoo, Sport, London.

Entry 3 – London.

Answers			
1a	6 people	4a	$£32 \times 3 = £96$
1b	15 people	4b	$£34 \times 2 = £68$
1c	10 people	4c	$£32 \times 2 = £64$
1d	4 people	5a	$£4 + £8 = £12$
2	 x	5b	$£4 + £2 = £6$ Change $£10 - £6 = £4$
		5c	Flag and hat or whistle and scarf
3a	7/02/(06) 3.15 pm	5d	$£4 + £6 + £2 + £8 = £20$
3b	$£22 + £14 = £36$	6	signature needed
3c	$£36 \times 5 = £180$	7	rectangle

To obtain an editable version of the original Word document please send teaching ideas or any adult basic skills resource that you would like to share to maggie@skillsworkshop.org

THANK YOU

In the club, people were asked, "What is your favourite sport?"

1. Here are their answers.



a. How many people liked rugby? _____



b. How many people liked football? _____




c. How many people liked cricket? _____



d. How many people liked golf? _____



2. Which ball is shaped like a sphere?



Put a cross to the right of the sphere.

3. Two friends from the club are going to see a Rugby League match.
Leeds Rhinos play Bradford Bulls on 17th February.
The game begins at quarter past three in the afternoon.

Here is a note telling your friend about the trip.

- a. **Complete the note using numbers for the date and time.**

Dear Joe,

Leeds Rhinos V Bradford Bulls is on

The game begins at _____ .

Do you want to come with us?

See you soon,

Jill

The tickets cost £22 each and the coach fare is £14.

- b. **How much will the trip cost for 1 person?**

- c. **How much will it cost for 5 people?**

4. You see this notice in the club for another trip.



- a. How much will the match tickets cost for 3 people?

- b. How much will the coach fares cost for 2 people?

Two more people decide to come.

They are going to drive to the stadium.

- c. How much will their match tickets cost?

5. Before the trip to the England Match, the clubs sells some souvenirs.

Scarf	£8
Flag	£6
Whistle	£2
Hat	£4

- a. I want to buy a hat and a scarf. How much do I need?

- b. If I buy a hat and a whistle, how much change will I have from £10?

- c. What can you buy for exactly £10?

- d. How much would it cost to buy 1 of each item?

6. The scarf is 98 cm long.
Ask your tutor for a tape measure.

Show the tutor 98 cm on the tape measure.


Candidate has shown me 98cm on the tape measure.

Assessor's signature _____

Date _____

7. Which shape is this flag?

Tick the right answer.



rectangle

triangle

circle