

Entry 2 Numeracy Practice – A

Going out for lunch

Curriculum References

Covers most areas of the E2 curriculum (number, measure and data).

Gaye Noel, the contributor, explains ...

I have put together 'practice assignments' for Entry 1 - 3 in order to prepare learners for the City & Guilds numeracy assignments.

Although they do not contain as many different areas of the curriculum as the actual live assignments, I have found them very useful. Hope someone else might as well!

Regards
Gaye Noel

Park Lane College
Leeds

More of Gaye's practice assignments are available:

Entry 1 – A, B.

Entry 2 – Lunch, Zoo, Sport, London.

Entry 3 – London.

Answers			
1a	13°C	8	3 ham rolls
1b	Yes		1 tuna sandwich
1c	because it will be sunny		4 buns
2	No – bus due in 2 minutes!		2 bottles of water
3	£0.89		3 coffees
4	g or grams		1 packet of crisps
5a	Choose cylinder or cube	9a	Circle
5b	Cylinder or cube written under correct shape	9b	Mark to left of bun
		9c	Line through the centre of bun
6	Signature needed	10a	15 people
7	Striped cubes 5	10b	20 people
	Striped cylinder 4	10c	15 – 10 = 5 people
	Checked cubes 8	10d	Bar drawn to 10 on graph
	Striped cylinders 8	11	Signature needed (right)






To obtain an editable version of the original Word document please send teaching ideas or any adult basic skills resource that you would like to share to maggie@skillsworkshop.org

THANK YOU

1. You wake up early on **Friday** morning.
You look at the weather report.


Weather

As reported at Leeds weather centre Tue 18/4/2006

Tue	Wed	Thu	Fri	Sat
				
Min: 6°C Max: 12°C	Min: 3°C Max: 12°C	Min: 4°C Max: 12°C	Min: 5°C Max: 13°C	Min: 10°C Max: 14°C

- a. What is the predicted maximum temperature today? _____
- b. Will it be OK to sit outside at the café today? Yes / No
- c. Why? _____

2. You decide to go into town first. The bus comes at 10.15.
You look at your clock.



Will you have time to make a cup of tea before you catch the bus?
Yes / No

3. It is your friend's birthday.
When you get into town you go to the market.
You need to buy a present and a card.



Price Code	Cost
A	£0.69
B	£0.89
C, D	£1.29
E, F	£1.79
G, H	£2.29

You choose a card. The price code letter is B.

How much is the card? _____

4. You see this sign.




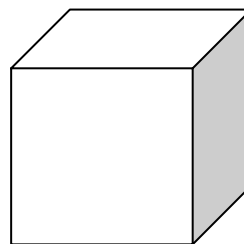
You choose 8 chocolates. The stall holder needs to weigh them.

Which unit does the stallholder use to weigh the chocolates?

cm m ml g

5. The chocolates are sold in 2 different boxes.





- a. Which shape do you like? cylinder / cube


- b. Write the name under the shape you like.

6. The Stallholder wraps 79 cm of ribbon around each box.
Ask your tutor for a tape measure.
Show the tutor 79 cm on the tape measure.

Candidate has shown me 79cm on the tape measure.



Assessor's signature _____ Date: _____

7. The boxes came in 4 designs.
The stallholder needed to count the boxes.



Complete the table

The cube shaped boxes with stripes have been done for you.

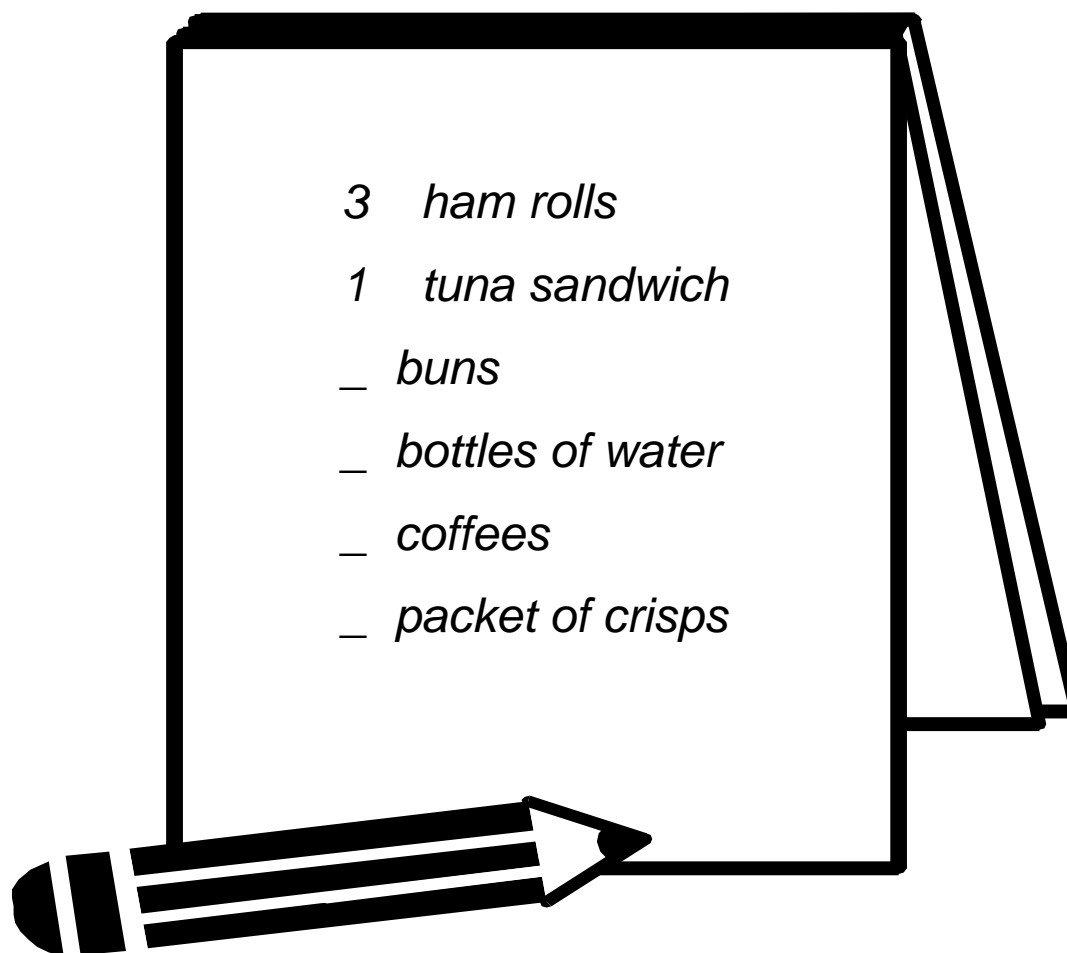
	cube	cylinder
 Stripes	5	
 Checks		

8. You go out for lunch with some friends.
The café sells snacks and drinks.

You order

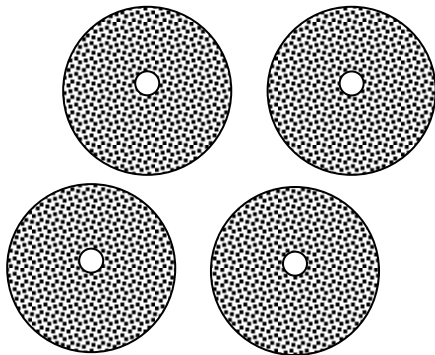
3 ham rolls, 1 tuna sandwich, 4 buns, 2 bottles of water,
3 coffees and 1 packet of crisps

The waitress writes this on her notepad



Complete the list.

9. Here are your buns



They are shaped like a

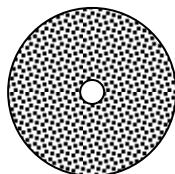
circle

rectangle

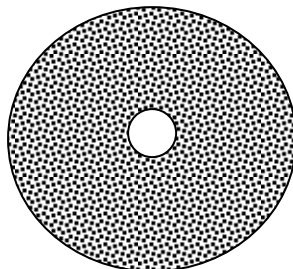
triangle

- a. Tick the correct answer

- b. The waitress puts a coffee on the left of the bun.
Mark where she puts the coffee.



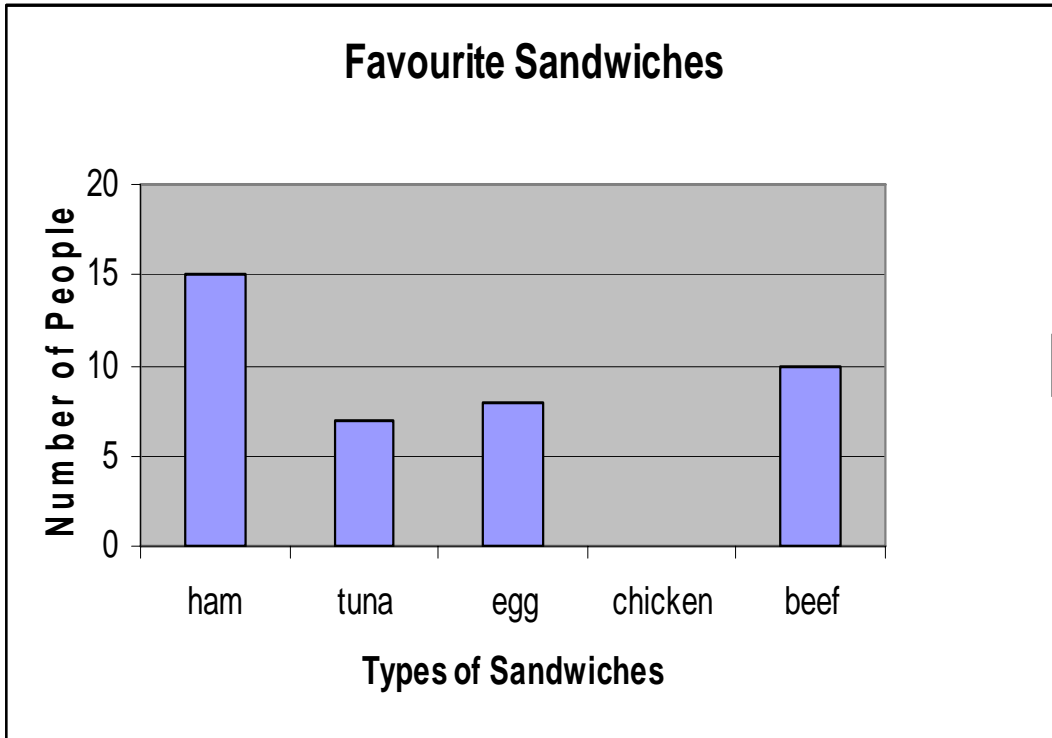
- c. You decide to cut your bun in $\frac{1}{2}$ and share it with your friend.



Show where you would cut the bun.

Draw a line across the bun.

10. The waitress asked 50 people what their favourite sandwich was.



- a. How many people like ham sandwiches? _____
- b. Round your answer to the nearest 10. _____
- c. How many more people like ham than beef? _____
- d. 10 people said their favourite was chicken. Add this bar to the chart.

11. When the bill comes you check how much you had spent.

1 ham sandwich	£	2.95
1 bun		0.70
1 coffee		1.40

Total	£	4.05

Check the bill on the calculator. Is it wrong or right? _____

Candidate checked the calculation on the calculator.

Assessor's signature _____ Date: _____