
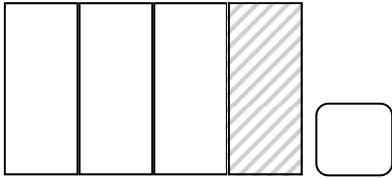


Fraction diagrams

Name _____ Date _____

Label the fractions: $\frac{1}{2}$ $\frac{1}{3}$ $\frac{1}{4}$




Write the word for the fraction:
a half a third a quarter

$\frac{1}{3}$


$\frac{1}{2}$

$\frac{1}{4}$


Mark $\frac{1}{2}$ cup




Mark $\frac{1}{4}$ cup




Mark $\frac{1}{3}$ cup




Mark a quarter of a cup





Mark a third of a cup



Mark half a cup



Label the fractions:
 $\frac{1}{3}$ $\frac{2}{3}$



Fraction diagrams


Name _____ Date _____

Write the word for the fraction:
a third two thirds


$1/3$

$2/3$


Mark a third
of a cup



Mark two thirds
of a cup



Label the fractions:
 $1/4$ $3/4$




Write the word for the fraction:
a quarter three quarters


$1/4$

$3/4$

Mark a quarter of
a cup



Mark three quarters
of a cup



Write the words:

$1/2$ cup

$1/3$ cup

$2/3$ cup

$1/4$ cup

$3/4$ cup