


# Properties of 2D shapes – Quadrilaterals

Name \_\_\_\_\_ Date \_\_\_\_\_

Write a description for each shape.

- Does the shape have straight or curved edges? How many?
- Are the edges the same lengths or different lengths?
- Does the shape have vertices (corners)? How many?



This shape is a \_\_\_\_\_

It has




This shape is a \_\_\_\_\_

It has



This shape is a \_\_\_\_\_

It has



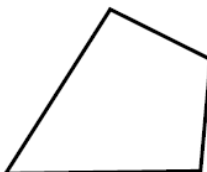
This shape is a \_\_\_\_\_

It has



This shape is a \_\_\_\_\_

It has



This shape is a \_\_\_\_\_

It has

parallelogram

rectangle

square

trapezium

kite

rhombus