

# Entry 1 Numeracy Practice - A

## Curriculum References

Covers most areas of the E1 curriculum (number, measure and data).

*Gaye Noel, the contributor, explains ...*

I have put together 'practice assignments' for Entry 1 - 3 in order to prepare learners for the City & Guilds numeracy assignments.

Although they do not contain as many different areas of the curriculum as the actual live assignments, I have found them very useful. Hope someone else might as well!

Regards  
Gaye Noel

Park Lane College  
Leeds

*More of Gaye's practice assignments are available:*

*Entry 1 – A, B.*

*Entry 2 – Lunch, Zoo, Sport, London.*

*Entry 3 – London.*




To obtain an editable version of the original Word document please send teaching ideas or any adult basic skills resource that you would like to share to [maggie@skillsworkshop.org](mailto:maggie@skillsworkshop.org)

**THANK YOU**

1. How many bicycles are there? \_\_\_\_\_



2. Fill the table to say how many taxis, bikes and planes there are in the picture above.

 <b>taxis</b>	
 <b>bikes</b>	
 <b>planes</b>	

3. What shape is this sign?  
Tick the right answer.



**square**

**triangle**

**circle**

4. Tick the 10p coin.



5. Which clock says two o'clock? Tick it.



6. Here are the sizes of some people's families.

<b>John</b>	<b>7</b>
<b>Isabel</b>	<b>5</b>
<b>Eva</b>	<b>9</b>
<b>Nasra</b>	<b>4</b>
<b>Yasin</b>	<b>8</b>

Write the families out in order, starting with the smallest.



4

7. Here is a list of TV films.

What time does the film on ITV start? \_\_\_\_\_

<b><i>Channel</i></b>	<b><i>Film</i></b>	<b><i>Start time</i></b>
<b>BBC1</b>	<b>Star Wars</b>	<b>4 o'clock</b>
<b>ITV</b>	<b>Trek</b>	<b>5 o'clock</b>
<b>CHANNEL FOUR</b>	<b>Spider Man</b>	<b>7 o'clock</b>


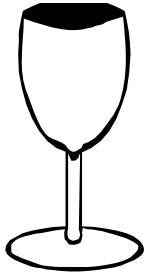
8. Tick the longest ladder.



9. Which of these dogs is larger? Tick it.



10. Which glass is full? Tick it.



11. Circle the heavier ring.

Ring 1 - 90 g




Ring 2 - 65 g



12. Put a tick between the 10p coin and the 5p coin.



13. I eat three of these Smarties.  
How many have I got left? \_\_\_\_\_



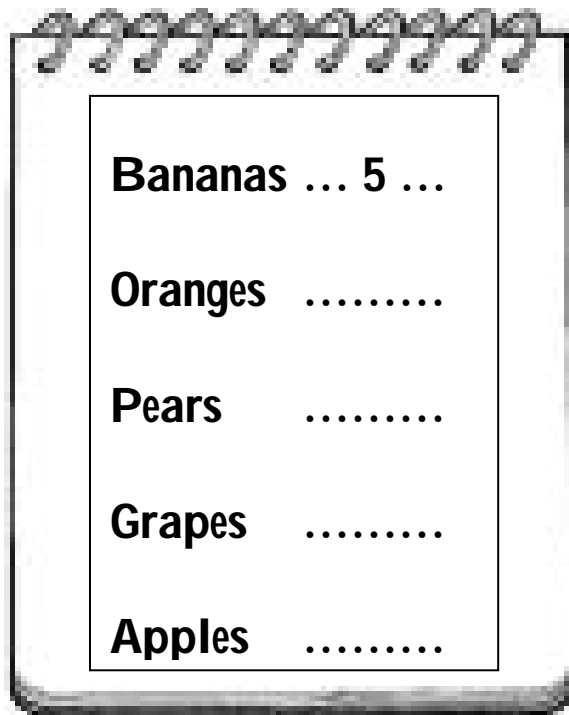
14. Circle all the cats.  
How many are there? \_\_\_\_\_



15. This is the fruit my friend ate last week.

Bananas	.....	5
Oranges	.....	9
Grapes	.....	10
Apples	.....	6
Pears	.....	4

Put the missing numbers in the list below.



16. My friend adds up **5, 9, 10, 6** and **4**. She gets 32.

Ask your tutor for a calculator and check what it comes to.

Was she right? Yes / No

<p><b>Student has checked this on a calculator</b> <b>Signed</b> .....</p>
--------------------------------------------------------------------------------