

Dine-in Valentine Meal Deal






Name _____ Date _____

Pat and Mitch want to stay at home on Valentine's Day.
They see this offer in the supermarket.

♥ Valentine's Day Meal Deal ♥ £15 ♥

1 starter, 1 main, 2 sides, 1 dessert and 1 drink.

All items serve two.

		Normal price	Dietary information
Starters 	Garlic bread hearts	£2	Vegetarian
	Cheese souffle	£3	Vegetarian
	Scallops	£4	
	Tomato soup	£3	Vegan
Mains 	Sirloin steaks	£8	
	Cod loin surprise	£7	
	Beet Wellington	£5	Vegan
	Spanish tortilla	£3	Vegetarian
Side dishes 	Potato wedges	£2	Vegan
	Winter veggies	£3	Vegan
	Spinach mornay	£4	Vegetarian
Desserts 	Blush fruit salad	£3	Vegan
	Raspberry cream hearts	£4	Vegetarian
	Chocolate pots	£5	Vegetarian
Drinks 	Alcohol-free martinis	£4	Vegan
	Prosecco (75cl bottle)	£9	Vegan
	Lager (4 x 330ml bottles)	£6	Vegan

Source: inspired from information and links at:

<https://www.mylondon.news/whats-on/shopping/valentines-day-meal-deals-2022-23018851>

Dine-in Valentine Meal Deal

Name _____ Date _____



1. a. Which items are listed above the **Mains** in the table? Tick (✓) one answer.

Side dishes

Desserts

Starters

b. Which items are listed below the **Desserts** in the table? Tick (✓) one answer.

Mains

Drinks

Starters

(E1.10, 2 marks)

2. How many items are OK for vegans?



(E1.2, E1.12, E2.22, 1 mark)

3. How many items normally cost more than £5?



(E1.1, E1.2, E2.22, 1 mark)

4. What is the normal price of Blush Fruit Salad?



(E2.22. 1 mark)

5. Which is **more expensive**, Cod Loin or Sirloin Steak?



(E1.1, E2.22. 1 mark)

6. List **three** items that cost less than £4.



(E1.1, E2.22, 2 marks)

7. Which item has the **lowest** normal price?

Tick (✓) the correct answer.

Chocolate pots

Winter veggies

Scallops

(E1.1, E2.22, 1 mark)

Dine-in Valentine Meal Deal

Name _____ Date _____



8. Complete the missing information in the table.

	Vegetarian food	Vegan food	Total
Side dishes		2	3
Desserts		1	
Drinks	0		

(E2.22, E2.24, E2.25, 3 marks)

9. Choose a meal deal for you and a friend.

a. Write it down in the table.

	Name	Normal price
Starter		
Main		
Side 1		
Side 2		
Dessert		
Drink		

(E2.22, E2.25, 3 marks)

b. What is the total cost if you pay the normal prices?

Show your working and your answer in the box.

(E2.5, 2 marks)

c. How much do you save by getting the items as a meal deal?

Show your working and your answer in the box.

(E2.5, 2 marks)

Dine-in Valentine Meal Deal

Name _____ Date _____



Y Stretch investigation

10. Which meal deal options give you the largest saving? **Explain why.**

Show all your working out and your answer in the box.

(E1.1, E2.5, E2.22, 6 marks)