


Properties of 2D shapes

Name _____ Date _____

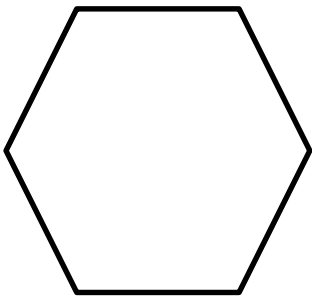
Write a description for each shape.

- Does the shape have straight or curved edges? How many?
- Are the edges the same lengths or different lengths?
- Does the shape have vertices (corners)? How many?



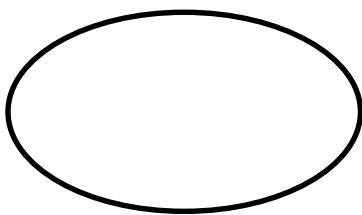
This shape is a _____

It has



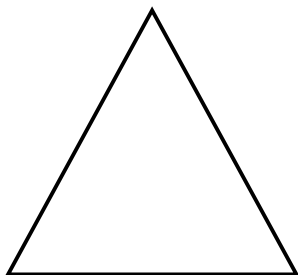
This shape is a _____

It has



This shape is a _____

It has



This shape is a _____

It has

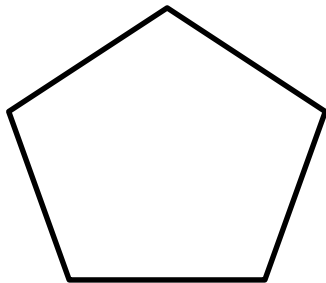
Properties of 2D shapes

Name _____ Date _____




This shape is a _____

It has



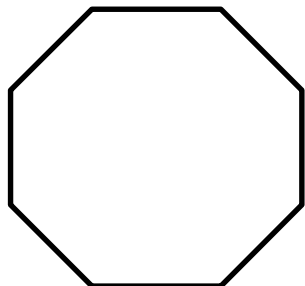
This shape is a _____

It has



This shape is a _____

It has



This shape is a _____

It has

hexagon

circle

square

pentagon

oval

triangle

rectangle

octagon