

Tally charts – good and bad points






Name _____ Date _____

Tally chart A

Look at the following tally chart.

- What do you like about it - good points?
- What possible problems are there with it - bad points?

Low cost Supermarkets Ltd

	<i>Number of boxes sold last week - tally</i>	<i>Total</i>
<i>apples</i>		<i>15</i>
<i>pears</i>		<i>12</i>
<i>bananas</i>		<i>8</i>
<i>pineapples</i>		<i>5</i>
<i>mangos</i>		<i>3</i>

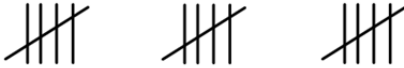




Tally charts – good and bad points

Name _____ Date _____

Tally chart B

Look at the following tally chart.

- What do you like about it - good points?
- What possible problems are there with it - bad points?

apples	
pears	
bananas	
pineapples	
mangos	

The most popular products sold were apples and pears. However, we only sold a few mangos and pineapples, possibly because they are much more expensive for the customers.