

# Olympics 2012 Functional Skills

Name \_\_\_\_\_ Date \_\_\_\_\_



**LONDON  
2012**



**Olympic Games 27 July -12 Aug 2012**

**Paralympic Games 29 Aug -9 Sept 2012**

## E1-E2 Functional Skills



# Olympics 2012 Functional Skills



Name \_\_\_\_\_ Date \_\_\_\_\_

1. What country are the 2012 Olympic Games being held in?

\_\_\_\_\_

2. What date do the Olympic Games start? Mark the date on the calendar.

July 2012						
Su	Mo	Tu	We	Th	Fr	Sa
1	2	3	4	5	6	7
8	9	10	11	12	13	14
15	16	17	18	19	20	21
22	23	24	25	26	27	28
29	30	31				

3. How long are the games on for? Use the calendars to help you.

\_\_\_\_\_

Mark the end date on the correct calendar

July 2012						
Su	Mo	Tu	We	Th	Fr	Sa
1	2	3	4	5	6	7
8	9	10	11	12	13	14
15	16	17	18	19	20	21
22	23	24	25	26	27	28
29	30	31				

August 2012						
Su	Mo	Tu	We	Th	Fr	Sa
			1	2	3	4
5	6	7	8	9	10	11
12	13	14	15	16	17	18
19	20	21	22	23	24	25
26	27	28	29	30	31	

# Olympics 2012 Functional Skills

Name \_\_\_\_\_ Date \_\_\_\_\_



4. What month do the Paralympics start?

\_\_\_\_\_

5. How many months are there left until the Olympic Games start?

\_\_\_\_\_

6. Is this more or less than 3 months to go?

\_\_\_\_\_

Aerial view of the Olympic stadium



7. What shapes can you see in the photo? Label them.

# Olympics 2012 Functional Skills

Name \_\_\_\_\_ Date \_\_\_\_\_



# Football

## Venues and nearest stations

- **City of Coventry Stadium.**      **Coventry Station: Coventry Central**
- **Hampden Park.**                      **Glasgow Station: Glasgow Central**
- **Millennium Stadium.**              **Cardiff Station: Cardiff Central**
- **Old Trafford.**                      **Manchester Station: Manchester Piccadilly**
- **St James' Park.**                      **Newcastle Station: Newcastle Central**
- **Wembley Stadium**                      **Wembley Park, Wembley Stadium, Wembley Central.**

You are going to watch the football. Which stadium would you choose to go to?

\_\_\_\_\_

8. Look up your chosen stadium on the computer.

Find and print a picture of it.

9. Now go to **Google Maps**

Click on **Get directions**

Put in the postcode of your school or college or home.

Put in the address or postcode of your chosen venue

Click **Get directions**

How many miles is it to your chosen venue? \_\_\_\_\_

# Olympics 2012 Functional Skills

Name \_\_\_\_\_ Date \_\_\_\_\_



# Times and prices

Date	Time	Session	Venue	Price of tickets
4 <sup>th</sup> Aug	12pm - 2pm	Quarter-final	Old Trafford	£50 £40 £20
4 <sup>th</sup> Aug	2.30pm – 4.30pm	Quarter-final	Wembley Stadium	£60 £45 £30 £20
4 <sup>th</sup> Aug	5pm – 7pm	Quarter-final	St James Park	£50 £40 £20
4 <sup>th</sup> Aug	7.30pm – 9.30pm	Quarter-final	Millennium Stadium	£50 £40 £20


Date	Time	Session	Venue	Price of tickets
7 <sup>th</sup> Aug	5pm – 7pm	Semi-final	Wembley Stadium	£125 £75 £45 £30
7 <sup>th</sup> Aug	7.45pm – 9.45pm	Semi-final	Old Trafford	£125 £75 £45 £30

Date	Time	Session	Venue	Price of tickets
10 <sup>th</sup> Aug	7.45 –9.45	Bronze medal match	Millennium Stadium	£75 £45 £30
11 <sup>th</sup> Aug	3pm – 5.30pm	Gold medal match	Wembley Stadium	£185 £125 £95 £65 £40


# Times of matches

Look at the times and prices list

10. The first football match on the 4<sup>th</sup> August starts at 12.00 and finishes at 2pm. Put the hands for this start and finish time on the clocks below.



11. Look at the start and finish times for the gold medal match. Put the times on the clocks below.



# Cost of tickets



Look at the times and price list

12. How much is the cheapest ticket?

\_\_\_\_\_

13. How much is the most expensive ticket?

\_\_\_\_\_

14. You and a friend want to go and see the gold medal match.

Between you, you have £50. Is this enough for two tickets? Yes / No

15. How much money for two of the cheapest tickets for the gold medal match?

Circle the notes below to show the right amount of money.



# Olympics 2012 Functional Skills

Name \_\_\_\_\_ Date \_\_\_\_\_

# When shall I go?

Look at the times and price list and choose a match you would like to go to.

Date: \_\_\_\_\_

16. Mark the date on the calendar.


August 2012						
Su	Mo	Tu	We	Th	Fr	Sa
			1	2	3	4
5	6	7	8	9	10	11
12	13	14	15	16	17	18
19	20	21	22	23	24	25
26	27	28	29	30	31	

17. What day of the week is this?

\_\_\_\_\_

18. What time is the event on? \_\_\_\_\_

Put the time on the clock.



19. Which venue is it at?

\_\_\_\_\_

20. How much does the cheapest ticket cost?

\_\_\_\_\_