

Entry 1 Numeracy Practice - B

Curriculum References

Covers most areas of the E1 curriculum (number, measure and data).

Gaye Noel, the contributor, explains ...

I have put together 'practice assignments' for Entry 1 - 3 in order to prepare learners for the City & Guilds numeracy assignments.

Although they do not contain as many different areas of the curriculum as the actual live assignments, I have found them very useful. Hope someone else might as well!

Regards
Gaye Noel

Park Lane College
Leeds

More of Gaye's practice assignments are available:

Entry 1 – A, B.


Entry 2 – Lunch, Zoo, Sport, London.

Entry 3 – London.

To obtain an editable version of the original Word document please send teaching ideas or any adult basic skills resource that you would like to share to maggie@skillsworkshop.org

THANK YOU

1. How many footballs are there? _____




2. Fill the table to say how many balls there are in the picture above.

	Rugby balls	
	Golf balls	
	Footballs	

3. What shape are the sails of the boat?

Tick the right answer.



square

triangle

circle

4. Tick the 5p coin.



5. Which clock says three o'clock? Tick it.



6. These are the ages of some children.

Carly	6
Amardeep	4
Nick	10
Rasha	3
Yasin	7

Write the ages out in order, starting with the largest.

7. Here is a list of some TV soaps.

What time does Eastenders start? _____

Channel	Film	Start time
BBC1	Eastenders	8 o'clock
ITV	Coronation Street	7 o'clock
CHANNEL FOUR	Hollyoaks	6 o'clock


8. Tick the longest train.



9. Which of the cakes is larger? Tick it.



10. Which glass is empty? Tick it.



11. Circle the heavier box of popcorn.



12. Put a tick between the 20p coin and the 50p coin.



13. I saw seven butterflies. Five flew away.

How many were left? _____

