

Entry 1 Numeracy Practice - A

Curriculum References

Covers most areas of the E1 curriculum (number, measure and data).

Gaye Noel, the contributor, explains ...

I have put together 'practice assignments' for Entry 1 - 3 in order to prepare learners for the City & Guilds numeracy assignments.

Although they do not contain as many different areas of the curriculum as the actual live assignments, I have found them very useful. Hope someone else might as well!

Regards
Gaye Noel

Park Lane College
Leeds

More of Gaye's practice assignments are available:

Entry 1 – A, B.

Entry 2 – Lunch, Zoo, Sport, London.

Entry 3 – London.




To obtain an editable version of the original Word document please send teaching ideas or any adult basic skills resource that you would like to share to maggie@skillsworkshop.org

THANK YOU

1. How many bicycles are there? _____



2. Fill the table to say how many taxis, bikes and planes there are in the picture above.

 taxis	
 bikes	
 planes	

3. What shape is this sign?
Tick the right answer.



square

triangle

circle

4. Tick the 10p coin.



5. Which clock says two o'clock? Tick it.



6. Here are the sizes of some people's families.

John	7
Isabel	5
Eva	9
Nasra	4
Yasin	8

Write the families out in order, starting with the smallest.



4

7. Here is a list of TV films.

What time does the film on ITV start? _____

<i>Channel</i>	<i>Film</i>	<i>Start time</i>
BBC1	Star Wars	4 o'clock
ITV	Trek	5 o'clock
CHANNEL FOUR	Spider Man	7 o'clock


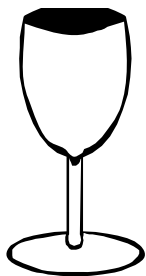
8. Tick the longest ladder.



9. Which of these dogs is larger? Tick it.



10. Which glass is full? Tick it.



11. Circle the heavier ring.

Ring 1 - 90 g



Ring 2 - 65 g




12. Put a tick between the 10p coin and the 5p coin.



13. I eat three of these Smarties.

How many have I got left? _____



14. Circle all the cats.

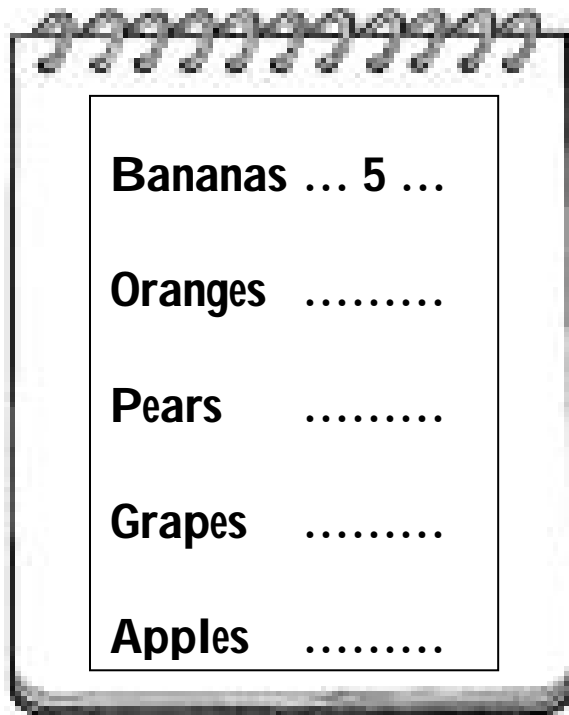
How many are there? _____



15. This is the fruit my friend ate last week.

Bananas	5
Oranges	9
Grapes	10
Apples	6
Pears	4

Put the missing numbers in the list below.



16. My friend adds up **5, 9, 10, 6** and **4**. She gets 32.

Ask your tutor for a calculator and check what it comes to.

Was she right? Yes / No

<p>Student has checked this on a calculator Signed</p>
--