

Name _____



1. Write thirty nine in figures
2. Write 25 in words

3. $5 + ? = 10$
4. $9 - 2 =$
5. $12 - 8 =$

6. How many days in 3 weeks?
7. Is 9 less than 8?

8. Draw a triangle.

9. Complete this: $\boxed{2} \rightarrow \boxed{4} \rightarrow \boxed{6} \rightarrow \boxed{} \rightarrow \boxed{}$

10. Complete this: $\boxed{3} \rightarrow \boxed{6} \rightarrow \boxed{9} \rightarrow \boxed{} \rightarrow \boxed{}$

11. Complete this: $\boxed{6} \rightarrow \boxed{12} \rightarrow \boxed{18} \rightarrow \boxed{} \rightarrow \boxed{}$

12. $25 + 9 =$

13. $76 + 11 =$

14. $54 - 12 =$

15a. $6 \times 8 =$

15b. $6 \times 3 =$

15c. $4 \times 5 =$

16. What is half of 36?

17. What is the price of crisps, to the nearest 10p?

<p>Crisps 37p</p>

18. $54 \times 4 =$

19. $64 \div 7 =$

20. $\pounds 3.46 + 26p + 12p =$

21. Measure this line to the nearest cm.

Name _____

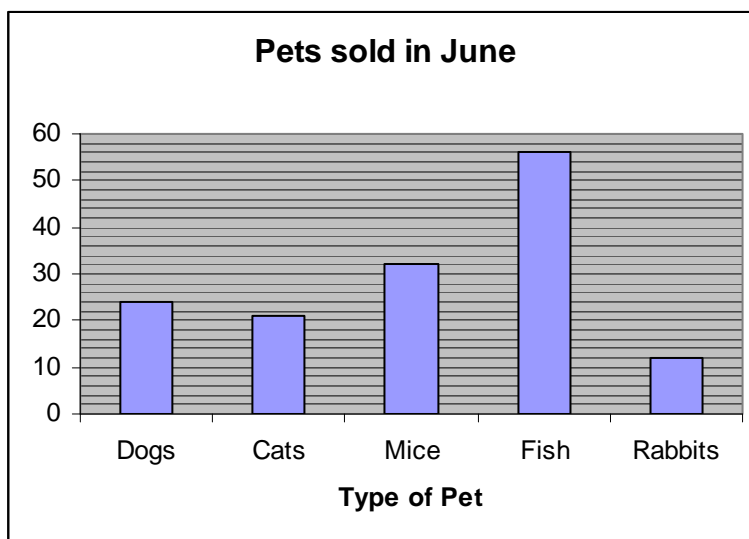


22. Round the following numbers to the nearest 10

- a) 27
- b) 85
- c) 34

23. How much is 100 minutes in hours and minutes.

24. Tick the heaviest item of shopping.



The next three questions are based on the chart above.

25. How many dogs were sold in June?

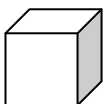
26. Which was the least popular pet in June?

27. Which pets sold more than 30 in June?

28. How many minutes in 1 hour?

29. Name these 3-D shapes

a



b




30. Tick the larger fraction.

$$\frac{1}{2}$$

$$\frac{1}{4}$$

ANSWERS

1	39	16	18
2	twenty five	17	40p
3	5	18	216
4	7	19	9 r 1 or 9.1
5	4	20	£3.84
6	21	21	9.2cm
7	No	22	30, 90, 30
8		23	1hr 40 minutes
9	8, 10	24	Middle one
10	12, 15	25	24
11	24, 30,	26	Rabbits
12	34	27	Mice and Fish
13	87	28	60 minutes
14	42	29	a cube b cylinder
15	48, 18, 20	30	$\frac{1}{2}$