

Name

At The Post Office

Open Morning	Lunch	Closed Afternoon
9 o'clock	1 o'clock - 2 o'clock	5 o'clock

1a) The Post Office opens at 9 o'clock

Draw the time on the clock face



1b) The Post Office closes at 5 o'clock. Is this morning or afternoon?

Tick () one box

Morning

Afternoon

1c) The Post Office opens before 8 o'clock. Is this true or false?

Tick () one box




True

False

Name

At the Cinema

Peter goes to the Cinema

	Price
Popcorn	
Coca Cola	
Film	

2a) Peter pays £1.  What is Peter buying?

Tick () one box

Popcorn

Coca Cola


2b) Peter wants to buy some popcorn

Tick () the correct number of coins he needs



2c) How much does it cost for two people to see the film?

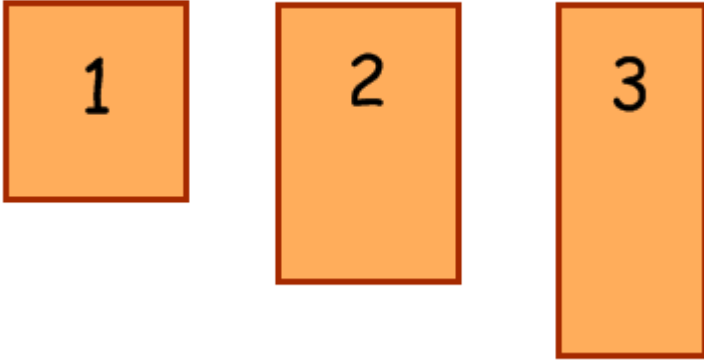
Tick () the correct amount



Name

Tables

Jane buys tables for the dining room in her hotel



3a) Which table is the longest?

Table Number:

3b) Jane looks at the width of the tables. Which table is the same width as table 1?

Table Number:

3c) Which table is the shortest?

Tick () one box

Table 1

Table 2

Table 3

Name

Days and Seasons

4a) Write the days in the correct order. *Some have been done for you.*

Days	Order
Wednesday	Monday
Friday	
Monday	
Thursday	
Tuesday	Friday

4b) Put the seasons in order. *One has been done for you.*

Season
Summer

4c) Spring is between Autumn and Summer. Is this true or false?

Tick () one box

True

False

Name

At the Bus Stop

Rebecca, Fatima and Mohammed are waiting for a bus

5a) Who is the tallest?

Answer



Rebecca Mohammed Fatima

5b) Fatima is shorter than Rebecca. Is this true or false?

Tick () one box

True

False

5c) A bus can seat more people than a car? Is this true or false?

Tick () one box

True

False



5d) The car is heavier than the bus. Is this true or false?

Tick () one box


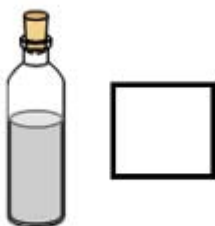
True

False

5e) Mohammed and Fatima each buy a bottle of milk.

Which bottle has the most milk in it?

Tick () one box




Name

Kitchen Shapes

6a) What shape is the plate?

a circle a square




6b) What shape is the tea-towel?

a rectangle a square



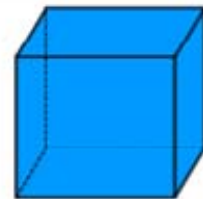
6c) What shape is the cookery book?

a circle a square



6d) What shape is the container?

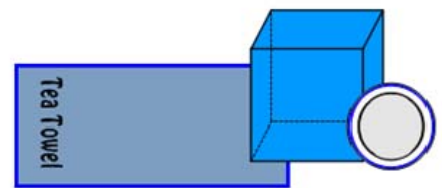
a rectangle a cube



6e) The tea towel is inside the container. True or false?

Tick () one box


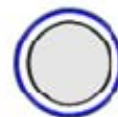
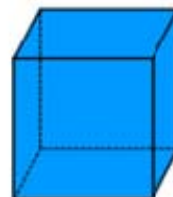
true false



6f) The book is between the plate and the container. True or false?

Tick () one box

true false



This is the end of the test!

Answers

At The Post Office

- 1a) The Post Office opens at 9 o'clock
- 1b) Afternoon
- 1c) False



At the Cinema

- 2a) Coca Cola
- 2b) £2 (3rd box)
- 2c) £10 (1st box)

Tables

- 3a) Table 3
- 3b) Table 2
- 3c) Table 1

Days and Seasons

- 4a) The days written in the correct order. (2 marks)
- 4b) The seasons written in the correct order. (2 marks)
- 4c) False

At the Bus Stop

- 5a) Mohammed
- 5b) False
- 5c) True
- 5d) False
- 5e) The first bottle

Kitchen Shapes

- 6a) A circle
- 6b) A rectangle
- 6c) A square
- 6d) A cube
- 6e) False
- 6f) False

Max score = 25

Pass mark is 80% (student must achieve at least 20/25).