

Name .....

## College Lessons

(4 marks)

Start and finish times of lessons

Lesson	Start Time	Finish Time
Maths	3 o'clock	4 o'clock
English	2 o'clock	5 o'clock
IT	1 o'clock	3 o'clock
Sport	2 o'clock	3 o'clock

1a) Which lesson starts at 1 o'clock?

*Write your answer in the box below*

1b) Which lesson finishes at 5 o'clock?

*Write your answer in the box below*

1c) How many lessons start at 2 o'clock?

*Tick (  ) one box*

1 lesson	<input type="checkbox"/>
2 lessons	<input type="checkbox"/>
3 lessons	<input type="checkbox"/>

1d) Which lesson finishes at the same time as the IT lesson?

*Tick (  ) one box*

Maths	<input type="checkbox"/>
Sport	<input type="checkbox"/>

Name .....

## Train Journeys

(3 marks)

Train Journeys			
Penzance	Mon	Tues	Thurs
Aberdeen	Mon		
St David's			Thurs

Maggie is going on holiday

2a) When can Maggie go to St David's? *Tick (  ) one box*

Monday  Tuesday  Thursday

2b) Can Maggie go to Aberdeen on Tuesday? *Tick (  ) one box*

Yes  No

2c) Where can Maggie go on Tuesday? *Tick (  ) one box*

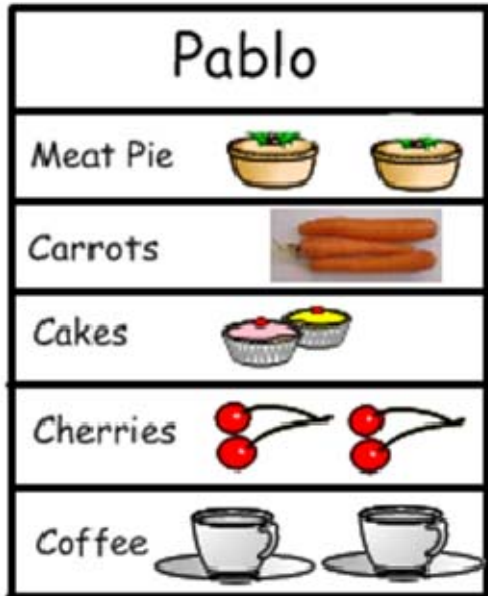
Penzance  Aberdeen  St David's

Name .....

## Meals

(5 marks – 1 for a and b, and 3 for c)

These are lunches for two men



Write your answers in the boxes below the questions

3a) How many Meat Pies are there for Pablo?

3b) How many coffees are there altogether for Marco and Pablo?

3c) Total the items for Pablo and Marco. One has been done for you.

Item	Number altogether for Pablo and Marco
Meat Pies	
Carrots	
Cakes	6
Cherries	

Name .....

## Telephone Numbers

(4 marks – 1 for a and b, 2 for c)

Here are the telephone numbers of four teachers

Sarah	4343
Ladan	5473
Alison	4467
Mehdi	3463

4a) What is Mehdi's number? *Write your answer in the box below.*

4b) Who has telephone number 4467? *Tick (  ) one box.*

Sarah  Ladan  Alison  Mehdi

4c) Which 2 people have numbers that start with 4?

*Write your answers in the boxes below.*

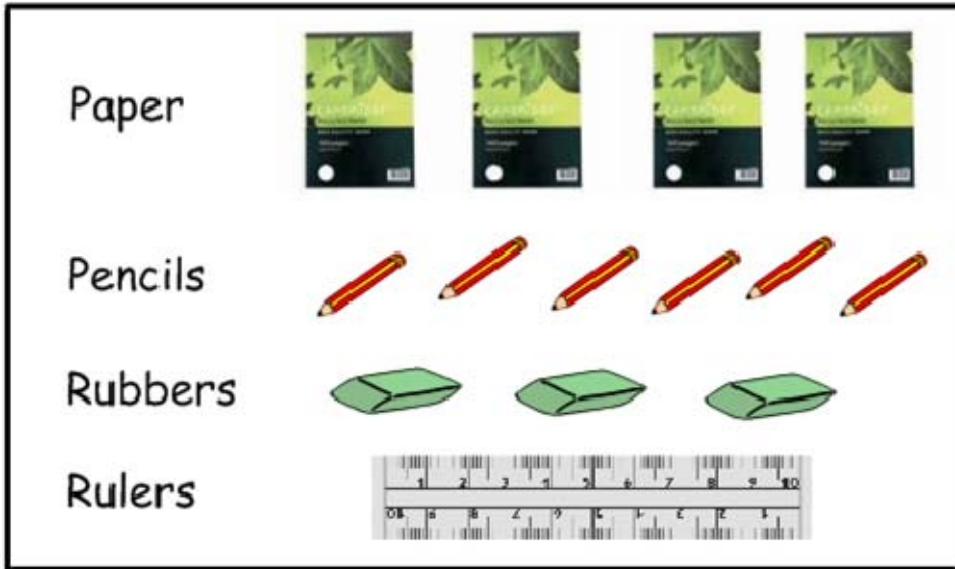
--	--

Name .....

## Stationery

(4 marks – 3 for a and 1 for b)

Look at the stationery list.



5a) Complete the table below. One has been done for you.

Box	Number
Paper	
Pencils	
Rubbers	3
Rulers	

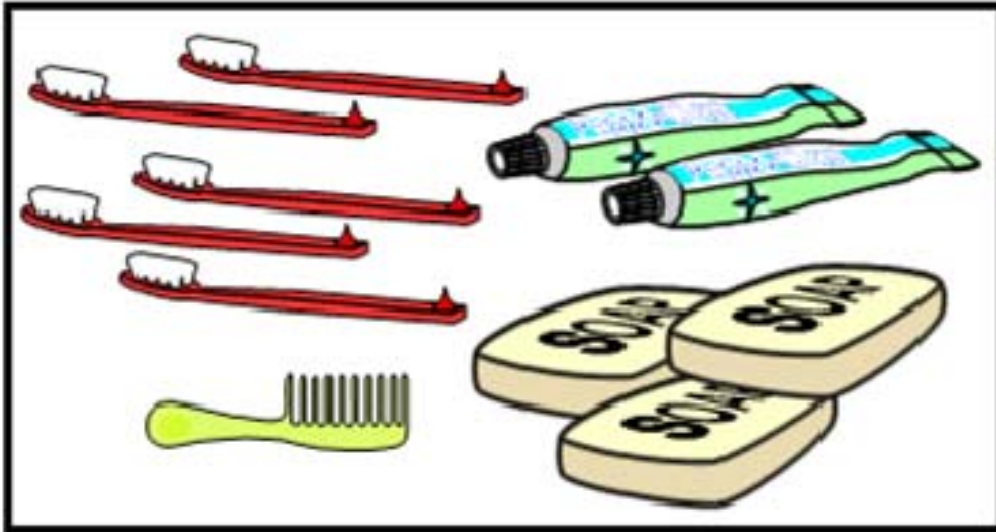
5b) Are there more Rubbers than Pencils? *Tick (✓) one box.*

Yes

No

Name .....

## In the Bathroom (2 marks)



6a) There are 4 toothbrushes in the bathroom. Is this True or False?

*Tick (  ) one box*

True

False

6b) There are 3 bars of soap in the bathroom. Is this True or False?

*Tick (  ) one box*

True

False

Name .....



## Shopping

(3 marks)

These people have been shopping and have bought some clothes

Name	Shopping
Ali	Jeans
Beth	Jeans
Dana	Hat
Raja	Jeans
Adam	Hat
Kenan	Hat
Shwan	Jeans

7a) Complete the following table for the people who have been shopping

Jeans	
Hat	

7b) Did more people buy jeans than a hat?

Tick (  ) one box

Yes

No

***This is the end of the test!***

## Answers

### College Lessons (4 marks)

- 1a) Which lesson starts at 1 o'clock? IT  
 1b) Which lesson finishes at 5 o'clock? English  
 1c) How many lessons start at 2 o'clock? 2 lessons  
 1d) Which lesson finishes at the same time as the IT lesson? Sport

### Train Journeys (3 marks)

- 2a) When can Maggie go to St David's? Thursday  
 2b) Can Maggie go to Aberdeen on Tuesday? No  
 2c) Where can Maggie go on Tuesday? Penzance

### Meals (5 marks)

- 3a) How many Meat Pies are there for Pablo? 2  
 3b) How many coffees are there altogether for Marco and Pablo? 3  
 3c) Total the items for Pablo and Marco. One has been done for you.

Item	Number altogether for Pablo and Marco
Meat Pies	3
Carrots	4
Cakes	6
Cherries	4

### Telephone Numbers (4 marks)

- 4a) What is Mehdi's number? 3463  
 4b) Who has telephone number 4467? Alison  
 4c) Which 2 people have numbers that start with 4? Sarah and Alison

### Stationery (4 marks)

- 5a) Complete the table (see right).  
 5b) Are there more rubbers than pencils? No



Box	Number
Paper	4
Pencils	6
Rubbers	3
Rulers	1

### In The Bathroom (2 marks)

- 6a) There are 4 toothbrushes in the bathroom. Is this True or False? False  
 6b) There are 3 bars of soap in the bathroom. Is this True or False? True

### Shopping (3 marks)

- 7a) See chart right.  
 7b) Did more people buy jeans than a hat? Yes

Jeans	
Hat	

**Max score = 25**

Pass mark is 80% (student must achieve at least 20/25).